

**THE UNITED REPUBLIC OF TANZANIA
NATIONAL EXAMINATIONS COUNCIL
CERTIFICATE OF SECONDARY EDUCATION EXAMINATION**

041

**BASIC MATHEMATICS
(For Both School and Private Candidates)**

Time: 3 Hours

Monday, October 10, 2005 a.m.

Instructions

1. This paper consists of sections A and B.
2. Answer **all** questions in section A and **four (4)** questions from section B.
3. **All** necessary working and answers for each question done **must** be shown clearly.
4. Mathematical tables and graph papers may be used unless otherwise stated.
5. You are advised to spend **not more than two (2)** hours on section A.
6. Electronic calculators are **not** allowed in the examination room.
7. Cellular phones are **not** allowed in the examination room.
8. Write your **Examination Number** on every page of your answer booklet(s).

CPE

This paper consists of 6 printed pages.

SECTION A (60 marks)

Answer all questions in this section showing all necessary workings and answers.

1. (a) Simplify $\frac{0.3754 \times 17.85}{0.00042 \times 9.33}$ and give your answer in four significant figures. (4 marks)
- (b) Change $0.0\bar{1}$ into a fraction. (2 marks)
- 2.

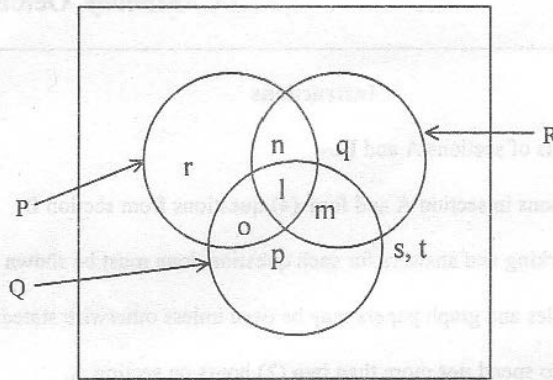


Figure 1

From the above figure, answer the following questions.

- (a) List down numbers of $(P \cup Q)'$ (2 marks)
- (b) Find $n(P \cup Q \cup R)'$ (2 marks)
- (c) Find $n(Q \cup R) - n(P \cap R)$ (2 marks)
3. If $\underline{u} = 4\mathbf{i} + 6\mathbf{j}$ and $\underline{v} = \frac{1}{2}\mathbf{i} - 3\mathbf{j}$; find:
- (a) \underline{w} for which $\underline{w} = \frac{1}{2}\underline{u} - 2\underline{v}$. (2 marks)
- (b) $|\underline{w}|$ correct to two decimal places. (2 marks)
- (c) the angle that \underline{w} makes with the positive direction of x - axis to the nearest degree. (2 marks)
4. (a) Solve for x if $(4^{(x+3)})(16^x) = 8^{3x}$ (3 marks)
- (b) If $\log a = 1.3010$; $\log b = 1.4771$ and $\log C = 1.7782$,

Calculate $\log \sqrt{\frac{a^2 b}{c^2}}$ (3 marks)

5. (a) AOP is the diameter of a circle with centre O.

Given that ABC is a straight line and angle $\hat{QBC} = 81^\circ$. Calculate the value of angle \hat{PAQ} . (3 marks)

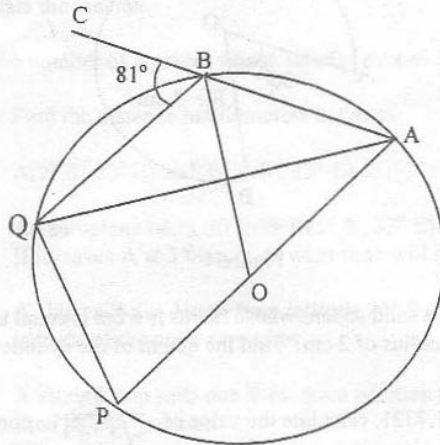


Figure 2

- (b) With reference to figure 3 below, calculate the length of segment \overline{CE} . (3 marks)

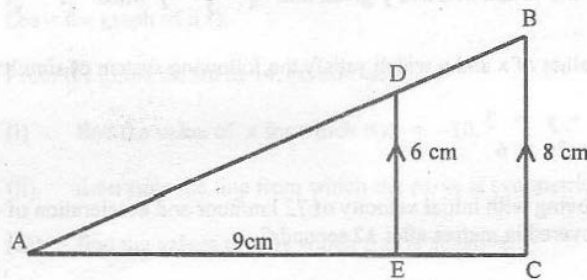


Figure 3

6. The 4th, 6th and 9th terms of an arithmetical progression (A.P.) forms the first three terms of a geometric progression. If the first term of the A.P. is 3, determine the (3 marks)
- common difference of the arithmetical progression.
 - common ratio of the geometrical progression. (3 marks)
7. Both lines "r" and "s" pass through the point (k, 9). Line "r" has a slope of $-\frac{1}{2}$ and passes through the point (5, -3). Determine the:
- value of k. (2 marks)
 - equation of "s" in standard form of $ax + by + c = 0$, if its x - intercept is -14 (2 marks)
 - equation of line "t" perpendicular to line "r" which passes through the point (k, 9) in form of $y = mx + c$. (2 marks)

8. (a) Figure 4 shows that $AO = OB = 7$ cm, $\angle AOB = 36^\circ$ and O is the centre of the circle. Calculate the perimeter of the figure. (3 marks)

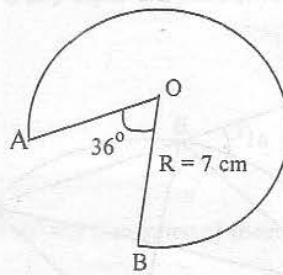


Figure 4

- (b) The surface area of a solid sphere whose radius is 6 cm is equal to the surface area of a solid right cylinder with radius of 2 cm. Find the height of the cylinder. (3 marks)
9. (a) Given that $\sqrt{3} = 1.7321$, calculate the value of $\frac{2}{\sqrt{3}-1}$ correct to 4 decimal places. (2 marks)
- (b) Determine the values of x and y given that $\frac{1}{x} + \frac{1}{y} = \frac{3}{2}$ when $\frac{1}{x^2} + \frac{1}{y^2} = \frac{5}{4}$. (4 marks)
10. (a) Find the values of x and y which satisfy the following system of simultaneous equations
- $$\begin{cases} 2x + y = 3 \\ x^2 - 2y = 6 \end{cases}$$
- (3 marks)
- (b) A car is moving with initial velocity of 72 km/hour and acceleration of 4 m/s^2 . What is the distance covered in metres after 12 seconds? (3 marks)

SECTION B (40 marks)

Answer four (4) questions from this section.

11. A certain secondary school intends to buy two types of Basic Mathematics reference books. The school wants between 10 and 15 books (inclusive) of author A which cost 8,000/= each. Books from author B cost 10,000/= each. If the school has 240,000/=, what is the maximum number of books can the school buy? (10 marks)
12. The following frequency distribution table shows the monthly salaries for 33 workers in a certain company.

Salary (Tsh.)	20000 - 29000	30000 - 39000	40000 - 49000	50000 - 59000	60000 - 69000
Number of workers	1	4	6	10	8

Salary (Tsh.)	70000 - 79,000	80000 - 89000
Number of workers	2	2

- (a) By taking the class mark of the class interval 50000 - 59000 as the assumed mean, calculate the mean salary. (4 marks)
- (b) What is the mode for this distribution? (2 marks)
- (c) Calculate the median. (2 marks)
- (d) Find the number of workers whose salaries exceed Tsh. 69,500/=. (2 marks)
13. (a) (i) Find the distance in kilometers between
A(9° S , 33° E) and B(5° S , 33° E). (2½ marks)
- (ii) An aeroplane takes off from B(5° S , 33° E) to C(5° S , 39° E) at a speed of 332 km/h. If it leaves A at 3:00 p.m. at what time will it arrive at C airport? (2½ marks)
- (b) (i) A ship sails due North from latitude 20° S for a distance of 1440 km. Find the latitude of the point it reaches. (2½ marks)
- (ii) A second ship sails due West from position (60° N , 5° W) for a distance of 1200 km. Find its new position. (2½ marks)
(Circumference of Earth = 4×10^4 km).
14. It has been specified that $f(x) = 2x^2 - 5x - 3$ ranges from $x = -2$ to $x = 4$.
- (a) Draw the graph of $f(x)$. (6 marks)
- (b) From the graph drawn in 14. (a) above;
- (i) find the value of x for which $f(x) = -10$.
- (ii) determine the line from which the curve is symmetrical.
- (iii) find the values of x by which $f(x)$ is negative.
- (iv) solve the equation $2x^2 - 5x - 3 = 0$. (4 marks)
15. (a) A two digit number is written using the numbers 2, 3 and 4 without repetition. Find the probability that the number is:
- (i) even.
- (ii) less than 30. (4 marks)
- (b) A family has four children. By using a tree diagram, find the probability that the family has:
- (i) all boys.
- (ii) two boys and two girls. (4 marks)
- (c) Find the probability that a number selected at random from the numbers -3, -2, 0, 3, 4 and 6 will be a solution set of the equation $x^2 - x - 6 = 0$. (2 marks)

16. (a) Given that $A = \begin{pmatrix} 4 & -3 \\ 1 & -2 \end{pmatrix}$, $B = \begin{pmatrix} 3 & 2 \\ -4 & 0 \end{pmatrix}$ and $C = \begin{pmatrix} -1 & 3 \\ 5 & -2 \end{pmatrix}$;

find $|3A - 2B + C|$. (3 marks)

(b) Solve for x and y in:

$$\begin{pmatrix} x \\ 3 \end{pmatrix} = \begin{pmatrix} 2 \\ x+y \end{pmatrix}. \quad (2 \text{ marks})$$

(c) A point (x, y) is rotated through 90° and then reflected about the line $y = x$. Find:

(i) a single matrix for this double transformation.

(ii) the image of the point $(3, 6)$ under this double transformation. (5 marks)